



22.04.21

Year 3

1. Read your reading book for 20 minutes each night.
2. Practise your times tables for 10 minutes each night. By the end of Year 3 you need to know your 3, 4 and 8 times tables and division facts.
3. Practise your spellings.
4. If you can play Times Table Rock Stars for 10 minutes each night.

Spellings:

information	adventure
exploration	captured
sensation	creatures
alteration	picture
observation	sculpture

History:

We are learning about Ancient Civilisations. One of these is the Shang Dynasty in China. A famous person from that time was Lady Fu Hao.

Do some research and make a fact file about Lady Fu Hao.

Make sure to put the information in your own words and don't write anything down you don't understand.



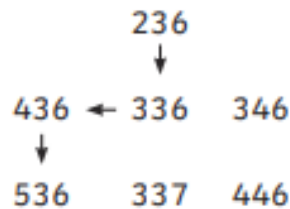
Homework due: 27.04.21




Lost in the Maze

I can find 100 more or less than a given number.

Cody needs to find his way to the golden cup. Choose a starting number from the top of the grid. Counting 100 more from that number each time, find the path to the cup. You can travel in any direction apart from diagonally.



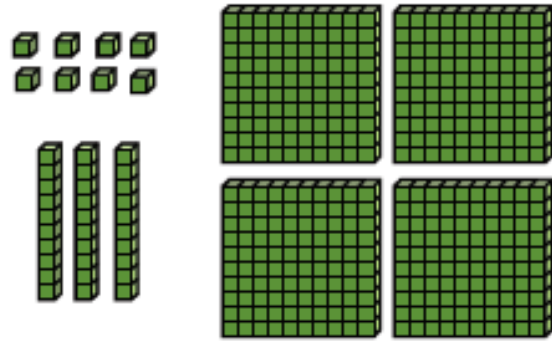
736	288	1076	688	367	803
746	388	488	588	467	903
756	766	676	667	567	1003
1267	1167	1067	767	1203	1103
	1077	967	867	1303	777
1209	589	483	976	1403	603

- 1) Find 10 more and 10 less than the number shown.

Use base ten blocks to help you.

10 more = _____

10 less = _____



- 2) Fill in the table below. The first row has been done for you.


Number	1 more	10 more	100 more
146	147	156	246
573			
			912
604			
	476		
		803	

- 1) True or false?

Statement	True or False?
a) 10 more than 462 > 100 less than 556	
b) 1 less than 750 < 100 more than 634	
c) 100 less than 643 = 10 more than 533	



- 2) Kareem starts with a number.
He puts it through the function machines.



He ends up with 676.

- a) What number did he start with? _____
- b) If Kareem had started off with 676, what number would he have ended up with? _____