



**01.04.21**

**Year 4**

1. Read your reading book for 20 minutes each night.
2. Practise your times tables for 10 minutes each night and complete your maths worksheet.
3. Practise your spellings.
4. If you can, play Times Table Rockstars, and Hit the Button for about 10 minutes each night.

**Spellings:**

breath

knowledge

possess

through

build

position

strange

remember

**Art**

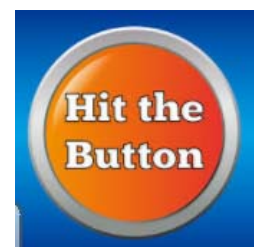
Create a collage of a scene you can see from a window in your house using different materials.

You could use items from your house or the surrounding area.



Be creative!

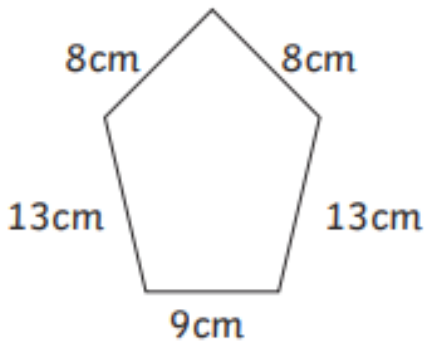
**Homework due: 20.04.21**




Maths Homework  
Due: 20.04.21

Calculate the perimeter of each of these shapes. Write the answer inside the shape. Always check the units of measure and remember that these drawings are not to scale!

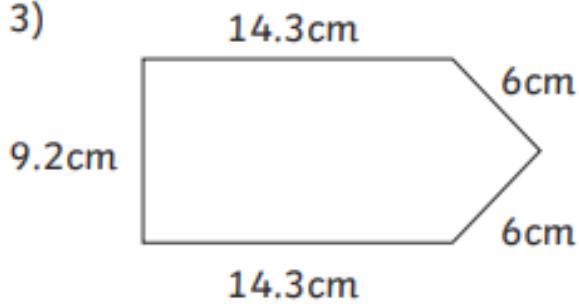
1)



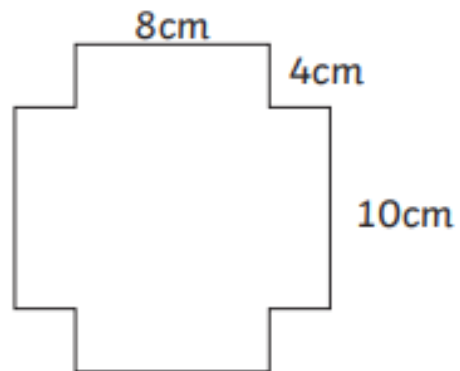
2)



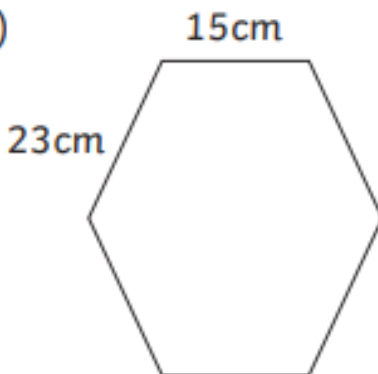
3)



4)



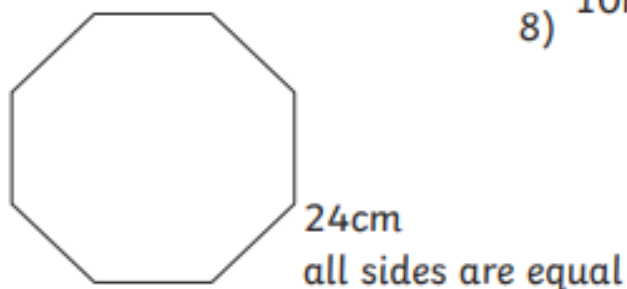
5)



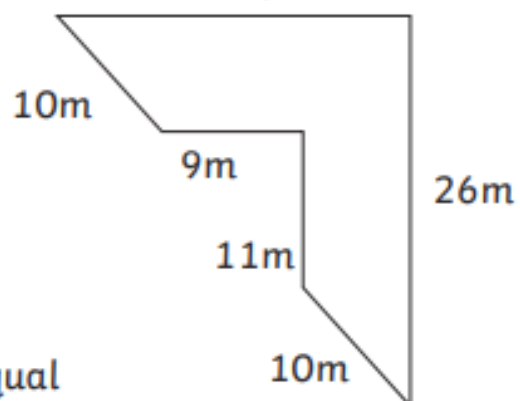
6)



7)



8)



Maths Homework  
Due: 20.04.21

Calculate the perimeter of each of these shapes. Write the answer inside the shape. Always check the units of measure and remember that these drawings are not to scale!

