



**18.03.21**

**Year 3**

1. Read your reading book for 20 minutes each night.
2. Practise your times tables for 10 minutes each night. By the end of Year 3 you need to know your 3, 4 and 8 times tables and division facts.
3. Practise your spellings.
4. If you can, play TT Rockstars and Hit the Button for 10 minutes each night.

**Spellings:**

island  
knowledge  
learn  
length

library  
Material  
medicine  
mention

**RE:**

**This term we are studying Hinduism and Holi. Create a poster about this wonderful festival.**

**Remember to include, what people do, what they wear and why it is celebrated.**



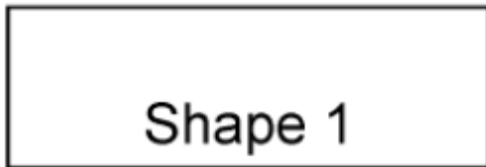
**Homework due: 23.03.21**



18.3.21

The perimeter of a shape is the path or distance all the way round the outside of it.

Calculate the perimeter for the shapes. Use a ruler to measure the sides.



Shape 1

Length of side 1 ..... cm

Length of side 2 ..... cm

Length of side 3 ..... cm

Length of side 4 ..... cm

Total perimeter ..... cm



Shape 2

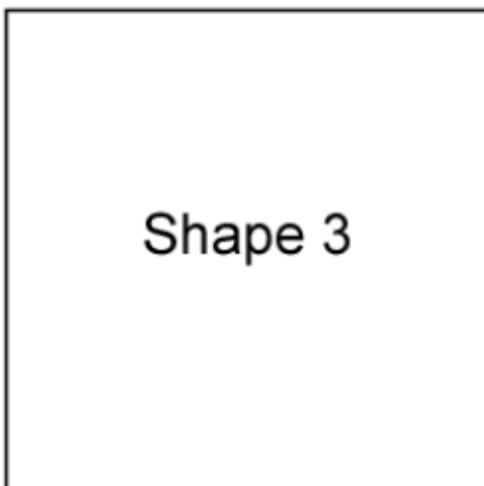
Length of side 1 ..... cm

Length of side 2 ..... cm

Length of side 3 ..... cm

Length of side 4 ..... cm

Total perimeter ..... cm



Shape 3

Length of side 1 ..... cm

Length of side 2 ..... cm

Length of side 3 ..... cm

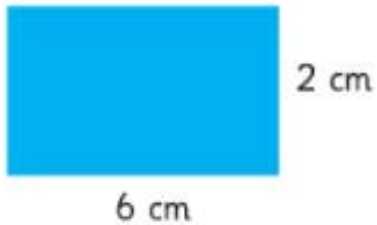
Length of side 4 ..... cm

Total perimeter ..... cm

18.3.21

Calculate the perimeter for the shapes.

1.



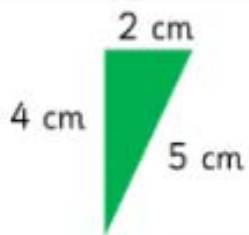
The perimeter is

2.



The perimeter is

3.



The perimeter is

4.



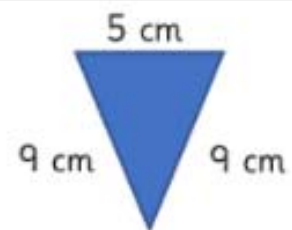
The perimeter is

5.



The perimeter is

6.



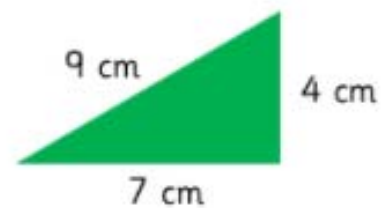
The perimeter is

7.



The perimeter is

8.



The perimeter is