



11.03.21

Year 4

1. Read your reading book for 20 minutes each night.
2. Practise your times tables for 10 minutes each night and complete your maths worksheet.
3. Practise your spellings.
4. If you can, play Times Table Rockstars and Hit the Button for about 10 minutes each night.

Spellings:

calendar	bicycle	busy	breathe
business	regular	build	believe

Homework:

Writing

Write a character description of a character in your reading book.

Remember to include:

Fronted adverbials

Adjectives

Metaphors and Similes

Paragraphs



Homework due: 16.03.21





11.03.21

Year 4

1. Read your reading book for 20 minutes each night.
2. Practise your times tables for 10 minutes each night and complete your maths worksheet.
3. Practise your spellings.
4. If you can, play Times Table Rockstars and Hit the Button for about 10 minutes each night.

Spellings:

earth	early	busy	breathe
business	regular	build	believe

Homework:

Writing

Write a character description of a character in your reading book.

Remember to include:

Fronted adverbials

Adjectives

Metaphors and Similes

Paragraphs



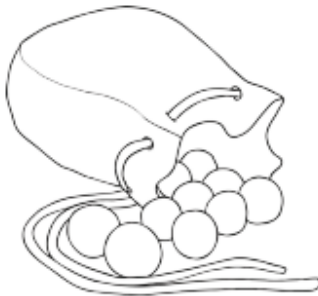
Homework due: 16.03.21



Maths Homework

Due: 16.03.21

1. A teacher asks some children to arrange some chairs into 12 rows of eight chairs. How many chairs will be laid out? _____
2. A crate contains 32 packs of four water bottles. How many bottles are there on each crate? _____
3. A photo album contains 28 pages. Each page can hold six photos. How many photos can each album hold? _____
4. A grocer has 37 packs of bananas. Each pack contains seven bananas. How many bananas are in the packs? _____




5. Marbles are sold in bags of 25. A shop has 16 bags. How many marbles are there altogether? _____
6. A badminton tournament is arranged at a local sports hall. There are 5 courts. Each court is allocated 18 shuttlecocks. How many shuttlecocks are allocated to the 5 courts? _____
7. Envelopes are sold in packs of ten. A supplier has 107 packs of envelopes. How many envelopes has the supplier? _____
8. A library has 50 shelves. Each shelf has 38 books. How many books are there in the library? _____



Maths Homework

Share 24 apples equally between 3 children.



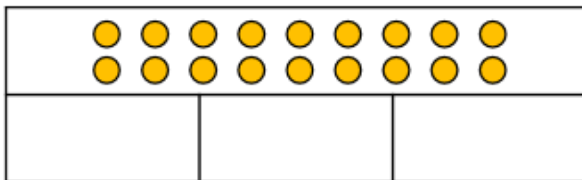
How many apples will each child get?

Share 18 pears equally between 3 children.

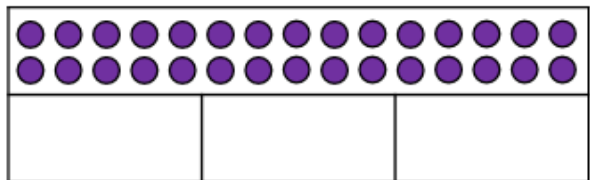


How many pears will each child get?

True or false? Eighteen divided by three equals seven.



True or false? Thirty divided by three equals nine.



Solve these calculations:

$30 \div 2 =$

$30 \div 3 =$

$30 \div 10 =$

$27 \div 3 =$

$42 \div 3 =$

$45 \div 3 =$

$36 \div 2 =$

$36 \div 4 =$

$36 \div 3 =$

$30 \div 5 =$

$45 \div 5 =$

$60 \div 5 =$

Find the missing numbers:

$\underline{\quad} \div 2 = 14$

$\underline{\quad} \div 3 = 4$

$27 \div \underline{\quad} = 9$