



**22.10.20**

**Year 3**

1. Read your reading book for 20 minutes each night.
2. Practise your times tables for 10 minutes each night. By the end of Year 3 you need to know your 3, 4 and 8 times tables and division facts.
3. Practise your spellings.
4. If you can, play Mathletics and Hit the Button for 10 minutes each night.

**Spellings:**

disappear	enough
early	exercise
earth	experiment
eight	experience


**Writing:**

After half term we will start to read a book about a magical forest. The book is called the 'The Tin Forest'. Draw a picture of your own forest and write 5 sentences to describe it.

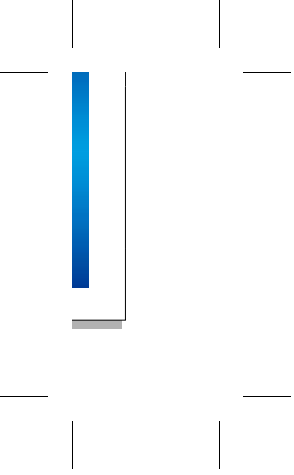


**Homework due: 03.11.20**





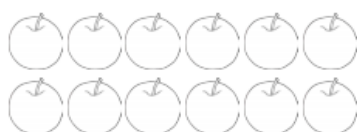




## Maths Homework

### Doubling and Halving


**12**



Double 12 is \_\_\_\_\_

Half of 12 is \_\_\_\_\_


**14**



Double 14 is \_\_\_\_\_

Half of 14 is \_\_\_\_\_


**16**



Double 16 is \_\_\_\_\_

Half of 16 is \_\_\_\_\_


**18**



Double 18 is \_\_\_\_\_

Half of 18 is \_\_\_\_\_


**20**



Double 20 is \_\_\_\_\_

Half of 20 is \_\_\_\_\_

**22**



Double 22 is \_\_\_\_\_

Half of 22 is \_\_\_\_\_



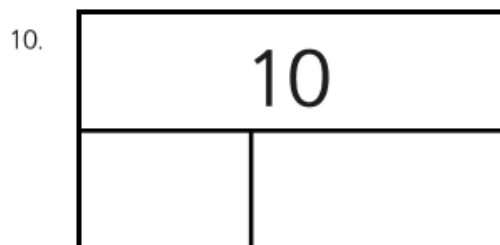
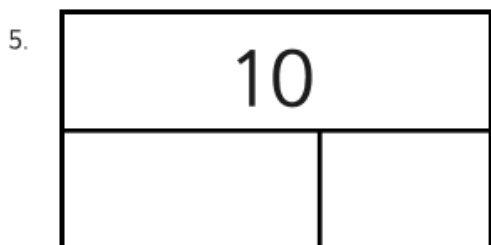


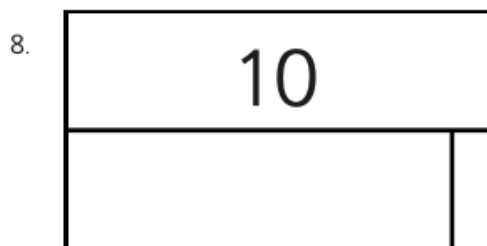
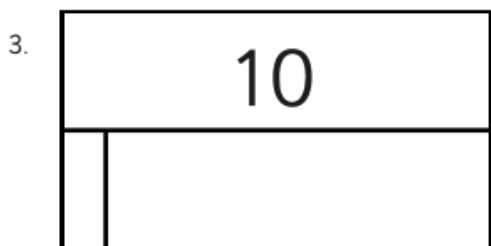

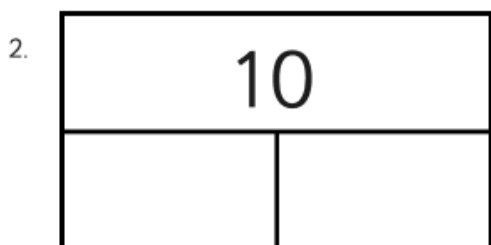
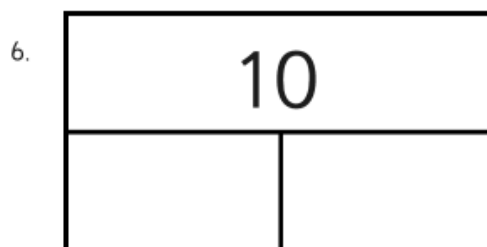
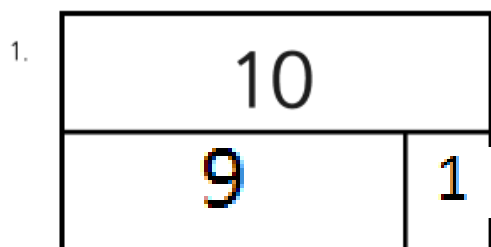


— | —

— | —



## Maths Homework







— | —

— | —

## Maths Homework

Calculate the missing number in each equation.

$$\square \times 9 = 46 + 8$$

$$50 \div 5 = \square \div 3$$

$$7 \times \square = 62 + 1$$

$$81 \div 9 = 54 \div \square$$

$$51 - 3 = \square \times 6$$

$$\square \div 3 = 32 \div 4$$

$$27 + 5 = 4 \times \square$$

$$30 \div \square = 20 \div 2$$





— | —

— | —