



08.10.20

Year 3

1. Read your reading book for 20 minutes each night.
2. Practise your times tables for 10 minutes each night. By the end of Year 3 you need to know your 3, 4 and 8 times tables and division facts.
3. Practise your spellings.
4. If you can, play Mathletics and Hit the Button for 10 minutes each night.

Spellings:


believe	build
bicycle	busy
breath	business
breathe	calendar

Writing:

This week we have been writing character descriptions of a hedgehog.


Draw a small picture of a different animal and write sentences describing it.

In your sentences you should include exciting adjectives.

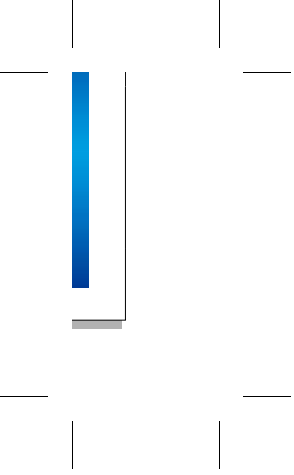


Homework due: 13.10.20









Maths Homework

10.10.19

Use the expanded method to solve:

$$254 + 319 =$$

$$138 + 517 =$$

$$233 + 329 =$$

$$469 + 115 =$$

$$344 + 228 =$$

$$167 + 231 =$$

$$469 - 233 =$$

$$779 - 116 =$$

$$685 - 214 =$$

$$849 - 312 =$$





— | —

— | —

Maths Homework

Use the expanded method to solve:

$$54 + 19 =$$

$$38 + 17 =$$

$$33 + 29 =$$

$$69 + 15 =$$

$$44 + 28 =$$

$$167 + 231 =$$

$$69 - 33 =$$

$$79 - 16 =$$

$$85 - 14 =$$

$$49 - 12 =$$





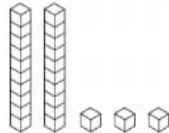
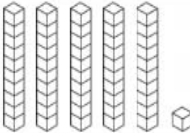
— | —

— | —

Maths Homework

Reading and Writing Numbers to 100 Worksheet

Can you fill out any missing boxes for each of the numbers below? The first one has been done for you to show you what to do.

Numerals	Number in Words	Tens	Ones	Illustration
23	twenty-three	2	3	
17	seventeen			
34				
	fifty-six	5	6	
		5	1	
49				





— | —

— | —