



01.10.20

Year 3

1. Read your reading book for 20 minutes each night.
2. Practise your times tables for 10 minutes each night. By the end of Year 3 you need to know your 3, 4 and 8 times tables and division facts.
3. Practise your spellings.
4. If you can, play Mathletics and Hit the Button for 10 minutes each night.
5. Log in to Google Classroom and complete the quiz.

accident	actually
accidentally	address
answer	appear
actual	arrive

Spellings:


Geography:

In our geography lessons we have been learning about the United Kingdom. Write a fact file about one of the countries in the UK: Wales, Scotland, Northern Ireland and England. You should include:

- Capital city
- Famous landmarks
- Physical features e.g. rivers, mountains and coast lines.

You might want to include some pictures in your fact file.

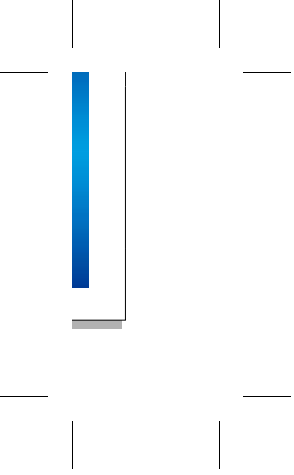






Homework due: 06.10.20





Maths Homework

01.10.20

<p>Calculate the answer to the following:</p> <p>1) $136 + 3 =$</p> <p>2) $212 + 4 =$</p> <p>3) $381 + 6 =$</p> <p>4) $494 + 5 =$</p> <p>5) $533 + 4 =$</p> <p>6) $620 + 7 =$</p> <p>7) $725 + 4 =$</p> <p>8) $952 + 7 =$</p>	<p>Calculate the answer to the following:</p> <p>9) $165 + 8 =$</p> <p>10) $224 + 7 =$</p> <p>11) $388 + 6 =$</p> <p>12) $478 + 5 =$</p> <p>13) $529 + 4 =$</p> <p>14) $645 + 9 =$</p> <p>15) $713 + 8 =$</p> <p>16) $995 + 6 =$</p>
<p>Calculate the answer to the following:</p> <p>17) $165 + 7 =$</p> <p>18) $252 + 6 =$</p> <p>19) $395 + 9 =$</p> <p>20) $478 + 1 =$</p> <p>21) $546 + 7 =$</p> <p>22) $659 + 3 =$</p> <p>23) $765 + 3 =$</p> <p>24) $971 + 8 =$</p>	<p style="text-align: center;">Challenge</p> <p style="text-align: center;">Explain how you would use $7 + 8 = 15$ to calculate $537 + 8$.</p>



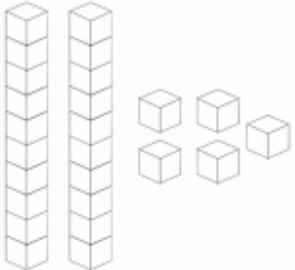
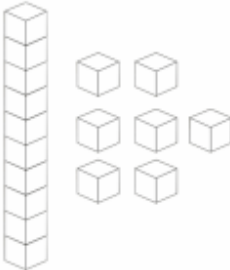
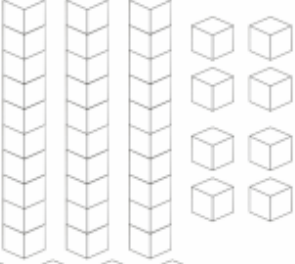
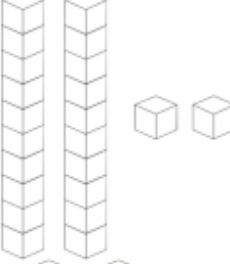
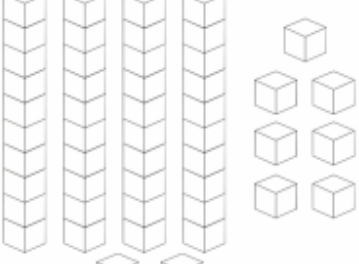
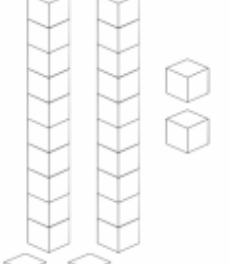
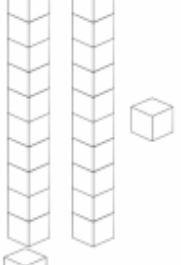
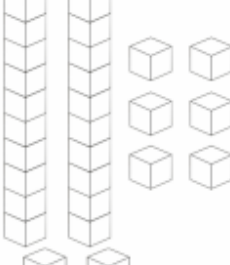
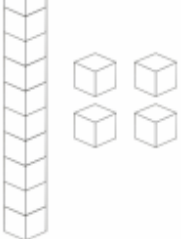
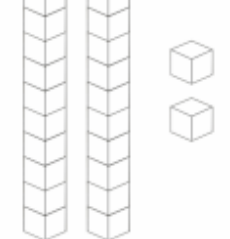
— | —

— | —

Maths Homework

01.10.20

Calculate the number of cubes and write your answers in the box.

	+		=	<input type="text"/>
	-		=	<input type="text"/>
	-		=	<input type="text"/>
	+		=	<input type="text"/>
	+		=	<input type="text"/>



— | —

— | —